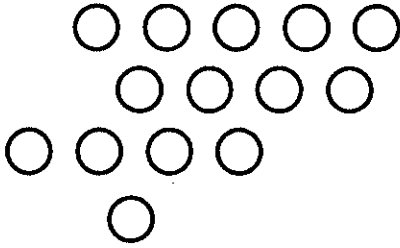


Question 1

How many circles are there?



Answer:

14

Question 2

Starting at 14, count up by 1's. Stop when you get to 20.

14, 15, 16, 17, 18, 19, 20**Question 3**

Starting at 45, count down by 1's. Stop when you get to 37.

45, 44, 43, 42, 41, 40, 39, 38, 37**Question 4**

Starting at 27, count up by 2's. Stop when you get to 41.

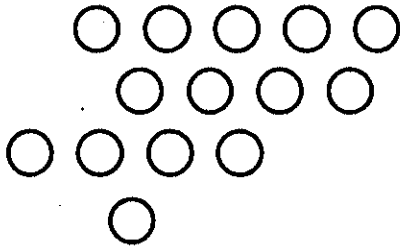
27, 29, 31, 33, 35, 37, 39, 41**Question 5**

Starting at 88, count down by 2's. Stop when you get to 70.

88, 86, 84, 82, 80, 78, 76, 74, 72, 70

Question 1

How many circles are there?



Answer:

Question 2

Starting at 14, count up by 1's. Stop when you get to 20.

14, 15, 16, 17, 18, 19, 20**Question 3**

Starting at 45, count down by 1's. Stop when you get to 37.

45, 46, 47, 48, 49, 50, 51, 52, 37**Question 4**

Starting at 27, count up by 2's. Stop when you get to 41.

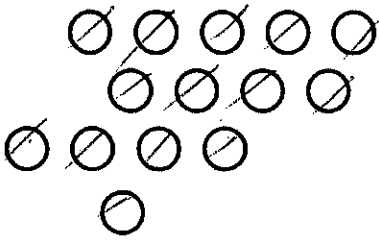
27, 29, 30, 31, 33, 35, 40, 41**Question 5**

Starting at 88, count down by 2's. Stop when you get to 70.

88, 86, 84, 80, 79, 78, 77, 76, 75, 70

Question 1

How many circles are there?



Answer:

14

Question 2

Starting at 14, count up by 1's. Stop when you get to 20.

14, 15, 16, 17, 18, 19, 20

Question 3

Starting at 45, count down by 1's. Stop when you get to 37.

45, 44, 43, 42, 41, 40, 39, 38, 37

Question 4

Starting at 27, count up by 2's. Stop when you get to 41.

27, 29, 30, 32, 34, 36, 39, 41

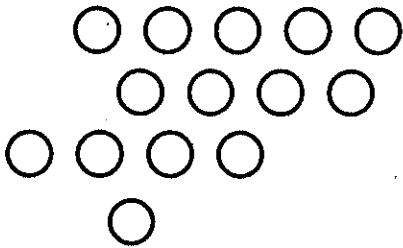
Question 5

Starting at 88, count down by 2's. Stop when you get to 70.

88, 86, 84, 82, 81, 80, 78, 76, 72, 70

Question 1

How many circles are there?



Answer:

47

Question 2

Starting at 14, count up by 1's. Stop when you get to 20.

14, 5, 6, 7, 8, 9, 20**Question 3**

Starting at 45, count down by 1's. Stop when you get to 37.

45, 41, 45, 9, 5, 4, 3, 2, 37**Question 4**

Starting at 27, count up by 2's. Stop when you get to 41.

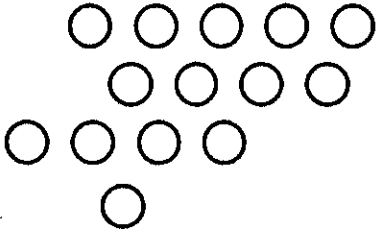
27, 27, 28, 24, 25, 26, 40, 41**Question 5**

Starting at 88, count down by 2's. Stop when you get to 70.

88, 88, 9, 10, 4, 5, 6, 7, 70, 70

Question 1

How many circles are there?



Answer:

Question 2

Starting at 14, count up by 1's. Stop when you get to 20.

14, 15, 16, 17, 18, 19, 20**Question 3**

Starting at 45, count down by 1's. Stop when you get to 37.

45, 44, 43, 41, 40, 39, 39, 38, 37**Question 4**

Starting at 27, count up by 2's. Stop when you get to 41.

27, 29, 31, 33, 35, 37, 39, 41**Question 5**

Starting at 88, count down by 2's. Stop when you get to 70.

88, 90, 92, 94, 96, 98, 90, 80, __, 70